

# Azaan International School

Grade: V

Worksheet

Subject: Social Science

Name: \_\_\_\_\_ Date: \_\_\_\_\_ Roll No: \_\_\_\_ Sec: \_\_\_\_\_

## Chapter 1: The Imaginary Lines

### I. Fill in the blanks:

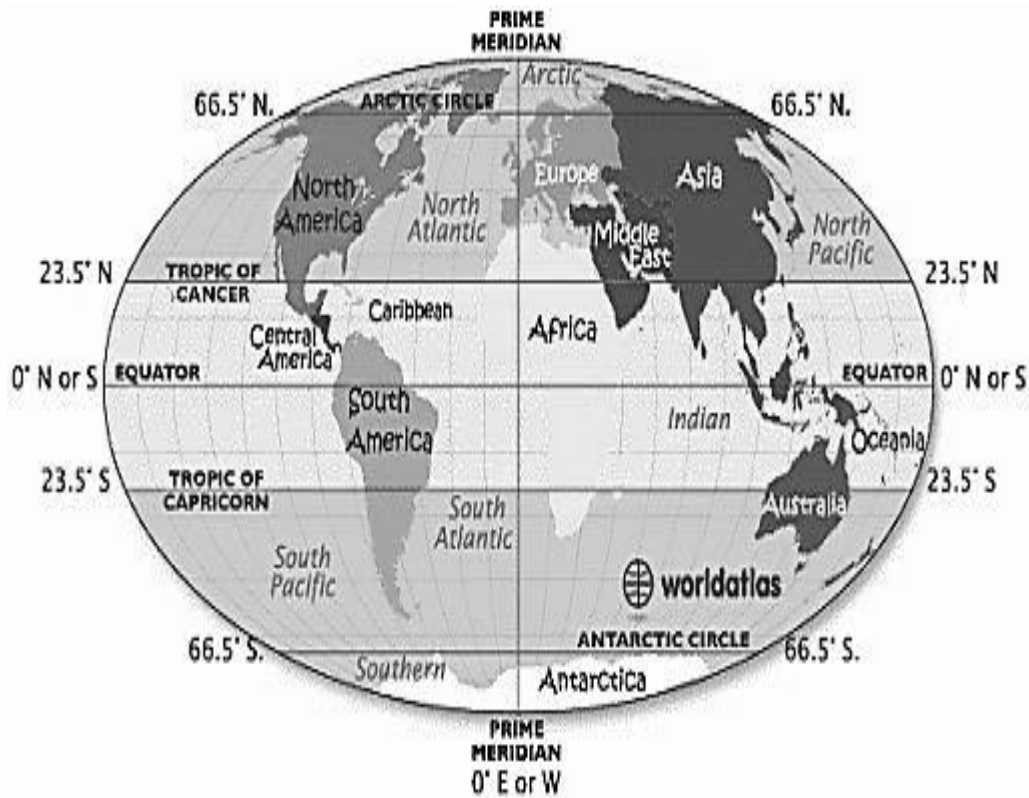
1. The two ends of the earth's axis are known as \_\_\_\_\_.
2. \_\_\_\_\_ is an imaginary line that divides the earth into two equal halves.
3. Latitudes run in \_\_\_\_\_ direction around the globe.
4. The equator is also known as \_\_\_\_\_.
5. \_\_\_\_\_ is the starting point for measuring longitudes.
6. 180° E and 180° W is the same longitude and is known as \_\_\_\_\_.
7. 0° longitude is called the \_\_\_\_\_.
8. Latitudes become smaller as they move away from the \_\_\_\_\_.
9. The \_\_\_\_\_ is the ratio between two points on the ground and their corresponding distance on a map.
10. India is located at \_\_\_\_\_ longitude.

### II. True or False

1. The art of making or drawing maps is called photography. ( )
2. A book of map is called Atlas. ( )
3. The Indian Standard time is 6 1/2 hours ahead of the Greenwich Mean Time. ( )
4. Latitudes are also called as Meridians. ( )
5. There are 180 lines of latitudes. ( )

### III. Picture Reading

Look at the given world Map and answer the questions.



1. Name the continents found in between  $23.5^{\circ}\text{N}$  and  $66.5^{\circ}\text{N}$

Ans: \_\_\_\_\_

2. Which important line of latitude passes through Australia?

Ans: \_\_\_\_\_

3. Name the continent through which the Prime Meridian passes.

Ans: \_\_\_\_\_

4. At what degree latitude Antarctic Circle located?

Ans: \_\_\_\_\_

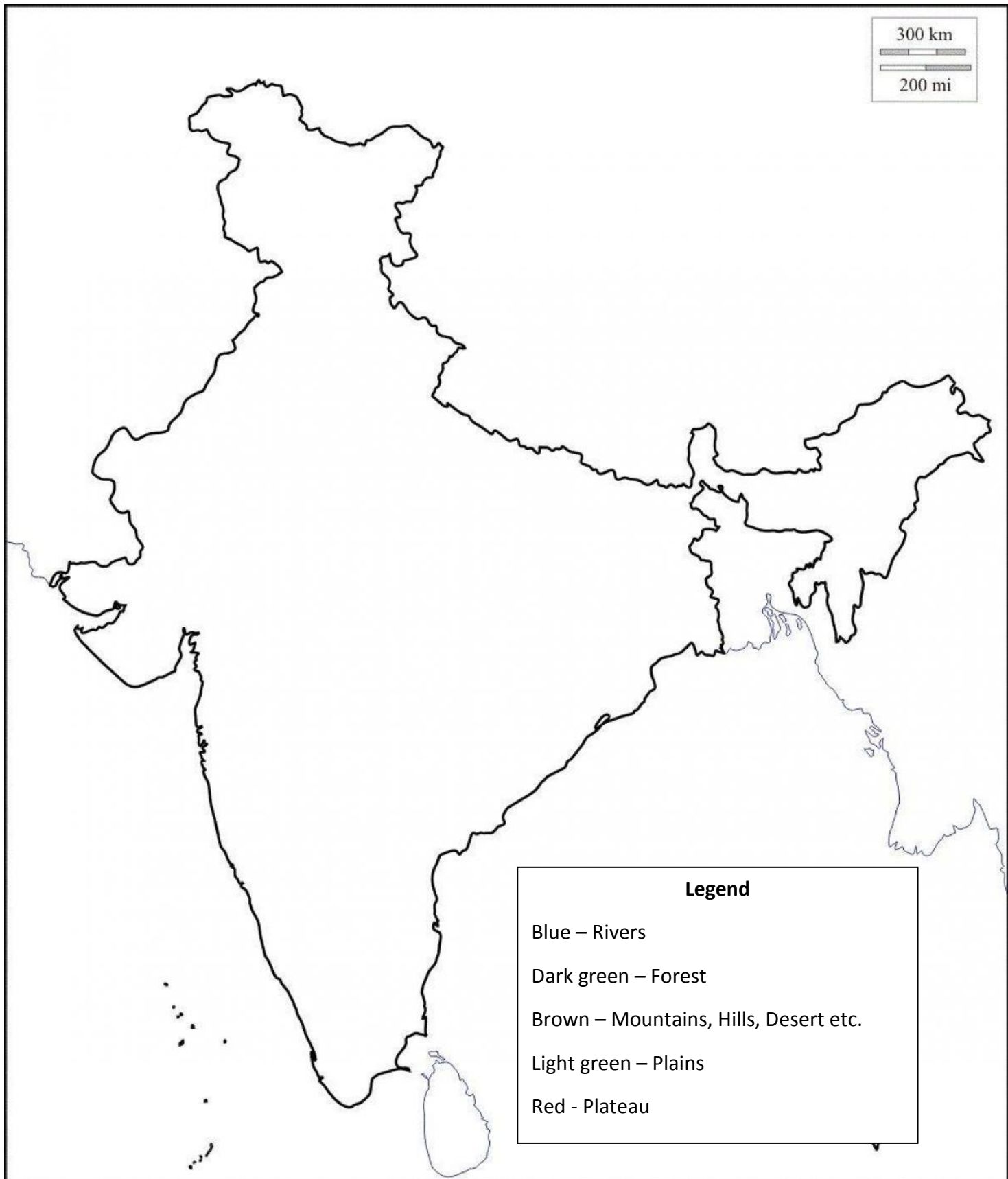
5. Name the important latitude that passes through India.

Ans: \_\_\_\_\_

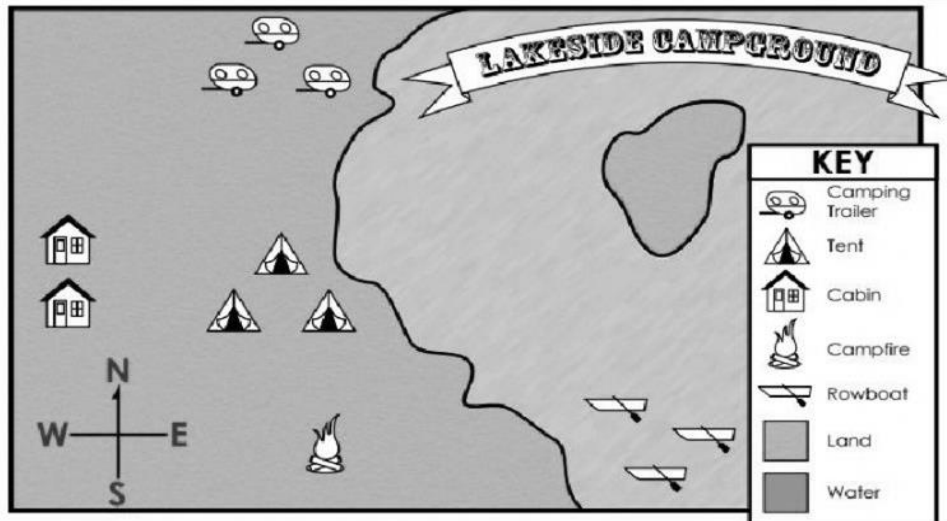
6. Which latitude is known as Great circle? What is its degree of location?

Ans: \_\_\_\_\_

IV. On the outline map of India mark the physical divisions of India and color the physical divisions using the colors mention in the legend.



V. Read a map and answer the questions given below. Write North, South, East and West to complete the sentence:



1. The rowboats are to the \_\_\_\_\_ of the campfire.
2. The camping trailers are \_\_\_\_\_ of the tents.
3. The cabins are \_\_\_\_\_ of the tents.
4. The campfire is \_\_\_\_\_ of the camping trailers.
5. The Islands is \_\_\_\_\_ of the cabins.

VI. Match the map symbol/legends with its name.

COMPASS	TOILET	BUS STOP	BICYCLE LANE
AIRPORT	SHOPS	MOSQUE	RESTAURANT
GASOLINE STATION	POLICE STATION	HOSPITAL	PLAYGROUND
HOTEL	SCHOOL	BRIDGE	TELEPHONE BOOTH
<input type="text"/>	<input type="text"/>	<input type="text"/>	<input type="text"/>
<input type="text"/>	<input type="text"/>	<input type="text"/>	<input type="text"/>
<input type="text"/>	<input type="text"/>	<input type="text"/>	<input type="text"/>
<input type="text"/>	<input type="text"/>	<input type="text"/>	<input type="text"/>